

# **A Level Geography**

**H481/02** Human interactions

## **Question Set 1**

Changing Spaces, Making Places

- 1 (a) Study **Fig. 1**, a computer-generated design for an urban development.

Use **one** piece of evidence from **Fig. 1** to explain how planners and architects have attempted to create a successful urban place.

[3]

- (b) Study **Fig. 2**, which shows OS 1:25 000 map extracts of an area in the rural-urban fringe of Ipswich for 1955 and 2015.

Using evidence from **Fig. 2**, suggest the roles of different players that may have been involved in driving economic change in this area.

[8]

- (c) Explain **two** ways that differing levels of income influence social inequality.

[6]

- (d)\* How far do you agree that place identity at a local scale is shaped by natural characteristics?

[16]

**Total Marks for Question Set 1: 33**

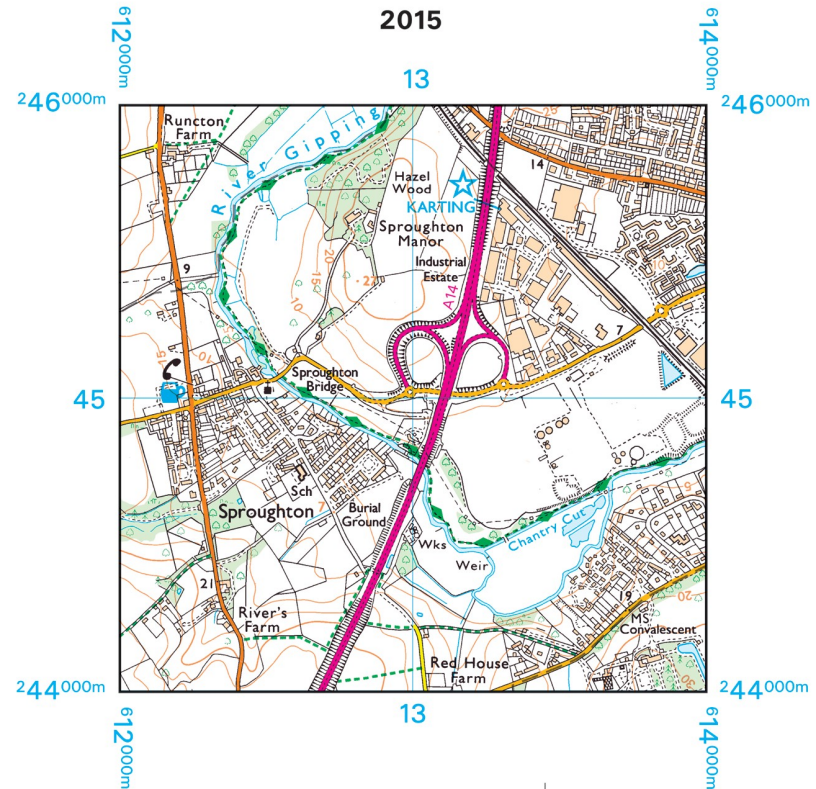
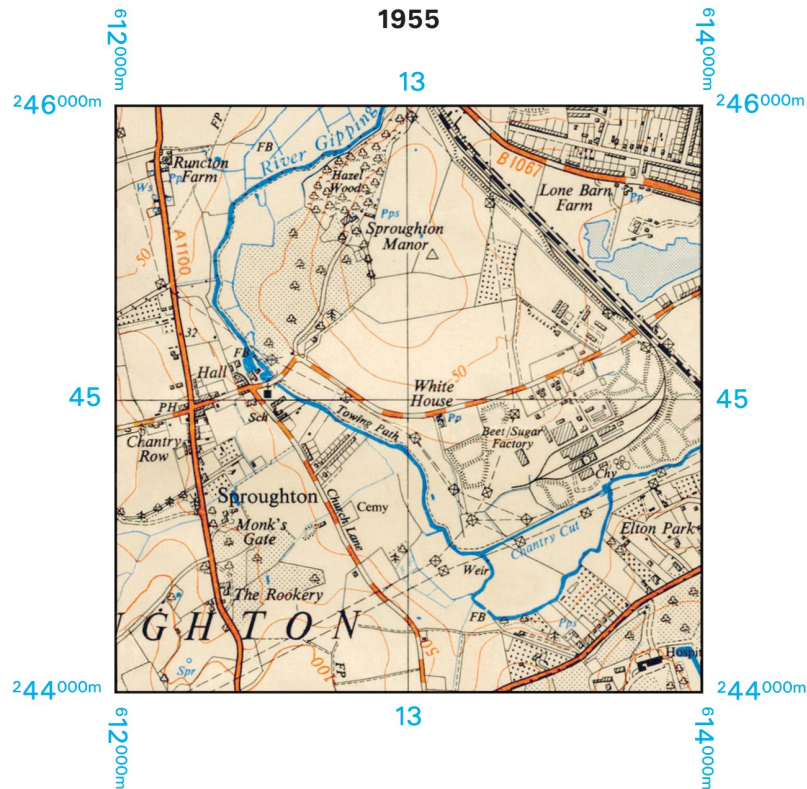
**Fig. 1 – Computer-generated design for an urban development**



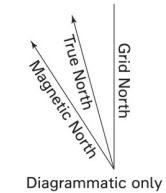
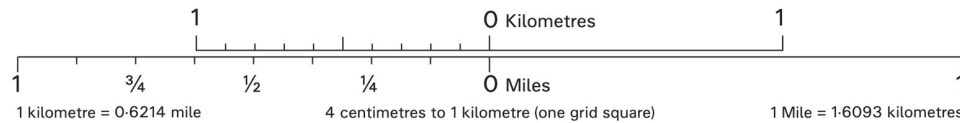




Four colours should appear above; if not then please return to the invigilator.  
 Four colours should appear above; if not then please return to the invigilator.



Scale 1: 25 000



Extract produced by Ordnance Survey 2017.  
 © Explorer Extract Crown copyright 2015. All rights reserved.

Ordnance Survey, OS, Explorer and OS logos are registered trademarks of OS, Britain's mapping agency.  
 Reproduction in whole or in part by any means is prohibited without the prior written permission of Ordnance Survey. **For educational use only.**



Oxford Cambridge and RSA

**Copyright Information**

OCR is committed to seeking permission to reproduce all third-party content that it uses in its assessment materials. OCR has attempted to identify and contact all copyright holders whose work is used in this paper. To avoid the issue of disclosure of answer-related information to candidates, all copyright acknowledgements are reproduced in the OCR Copyright Acknowledgements Booklet. This is produced for each series of examinations and is freely available to download from our public website ([www.ocr.org.uk](http://www.ocr.org.uk)) after the live examination series.

If OCR has unwittingly failed to correctly acknowledge or clear any third-party content in this assessment material, OCR will be happy to correct its mistake at the earliest possible opportunity.

For queries or further information please contact The OCR Copyright Team, The Triangle Building, Shaftesbury Road, Cambridge CB2 8EA.

OCR is part of the Cambridge Assessment Group; Cambridge Assessment is the brand name of University of Cambridge Local Examinations Syndicate (UCLES), which is itself a department of the University of Cambridge